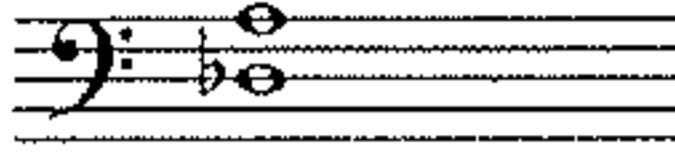


# Music Theory - Self Test

If you get seven or more correct out of the ten questions it is recommended you take the **Music Theory** placement exam.  
(Answers are at the the bottom of the page.)

1. Name the following interval.




- A. P5                      C. A5  
B. P4                      D. d4                      E. None of the above.

2. Name the following interval.




- A. m7                      C. M7  
B. d7                      D. A7                      E. None of the above.

3. Name the major or minor key indicated by the given key signature.




- A. E-flat major            C. D minor                      E. None of the above.  
B. A major                      D. B-flat minor

4. Name the major or minor key indicated by the given key signature.




- A. C minor                      C. B minor                      E. None of the above.  
B. F-sharp major            D. A-flat major

5. Name the following scale.



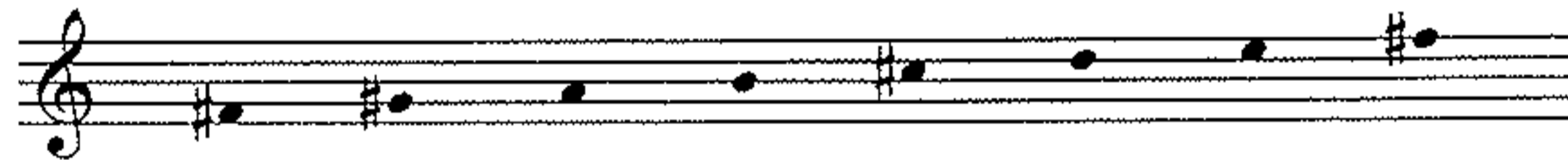
- A. Major    B. Natural minor    C. Harmonic minor    D. Melodic minor    E. None of the above.

6. Name the following scale.



- A. Major    B. Natural minor    C. Harmonic minor    D. Melodic minor    E. None of the above.

7. Name the following scale.




- A. Major    B. Natural minor    C. Harmonic minor    D. Melodic minor    E. None of the above.

8. Name the following triad.



- A. Major    C. Diminished                      E. None of the above.  
B. Minor    D. Augmented

9. Name the following triad.



- A. Major    C. Diminished                      E. None of the above.  
B. Minor    D. Augmented

10. In what position is the following triad?



- A. Root position    C. 2nd inversion                      E. None of the above.  
B. 1st inversion    D. 3rd inversion